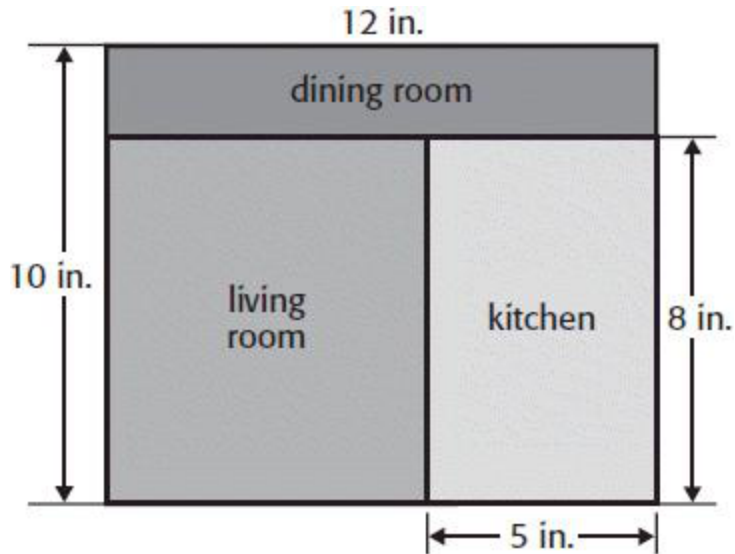


**Gr3 Q3 Post Test Benchmark Teacher Copy**

**Solve.**

1. Use the Distributive Property to find the perimeter and the area of the living room and the dining room combined from Cami's doll house. AK 3.MD.9



**Read each question. Select the correct answer.**

2. Matthew is comparing fractions. Which comparison is true? 3.NF.3

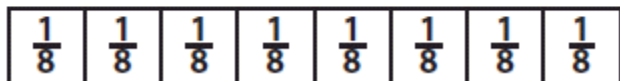
- a.  $\frac{2}{6} > \frac{3}{6}$       b.  $\frac{2}{6} > \frac{2}{4}$   
c.  $\frac{2}{6} < \frac{2}{3}$       d.  $\frac{2}{6} = \frac{3}{6}$

**Gr3 Q3 Post Test Benchmark Teacher Copy**

3. Lauren cleans horse stables for 2 hours each weekend. How many hours did Lauren clean stables after 7 weekends? 3.OA.3

- a. 9 hours      b. 14 hours
- c. 16 hours    d. 5 hours

4. Which fraction is equivalent to  $\frac{3}{4}$ ? 3.NF.3



- a.  $\frac{7}{8}$       b.  $\frac{6}{8}$
- c.  $\frac{4}{8}$       d.  $\frac{5}{8}$

**Gr3 Q3 Post Test Benchmark Teacher Copy**

5. Which fraction describes the figure?



a.  $\frac{8}{8} = 8$       b.  $\frac{8}{1} = 8$

c.  $\frac{1}{8} = 1$       d.  $\frac{8}{8} = 1$

Gr3 Q3 Post Test Benchmark Teacher Copy

Read each question carefully. Write the correct answer. AK 3.MD.4

Use the tally chart below.

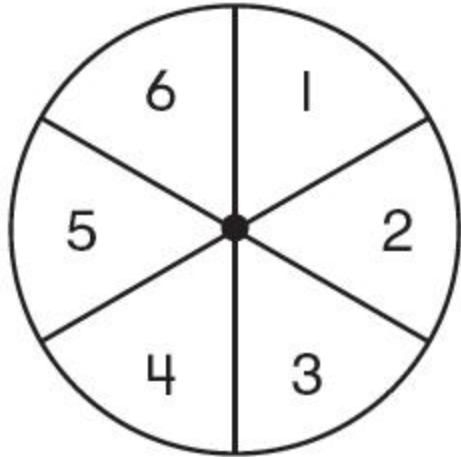
Length of Beetle (inches)	
Length	Tally
$\frac{1}{4}$ inch	
$\frac{2}{4}$ inch or $\frac{1}{2}$ inch	
$\frac{3}{4}$ inch	
$\frac{4}{4}$ inch or 1 inch	
$1\frac{1}{4}$ inch	
$1\frac{2}{4}$ inch	

6. Which size of beetle appeared most frequent?

**Gr3 Q3 Post Test Benchmark Teacher Copy**

**Read each question carefully. Select the correct answer.**

7. Quwante is playing a game with the spinner below. What fraction of the spinner has a number equal to 4 or less? AK 3.MD.5

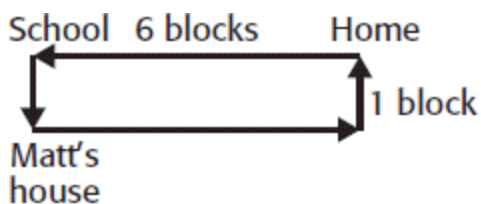


a.  $\frac{2}{6}$       b.  $\frac{4}{6}$

c.  $\frac{1}{2}$       d.  $\frac{5}{6}$

**Solve.**

8. Stan walks to school every day. On his way home, he goes to his friend Matt's house. How far does Stan walk every day to and from school? AK 3.MD.10



**Gr3 Q3 Post Test Benchmark Teacher Copy**

9. Which is the best estimate for the mass of a soccer ball?

- a. 10 g    b. 2 kg
- c. 2 g    d. 10 kg

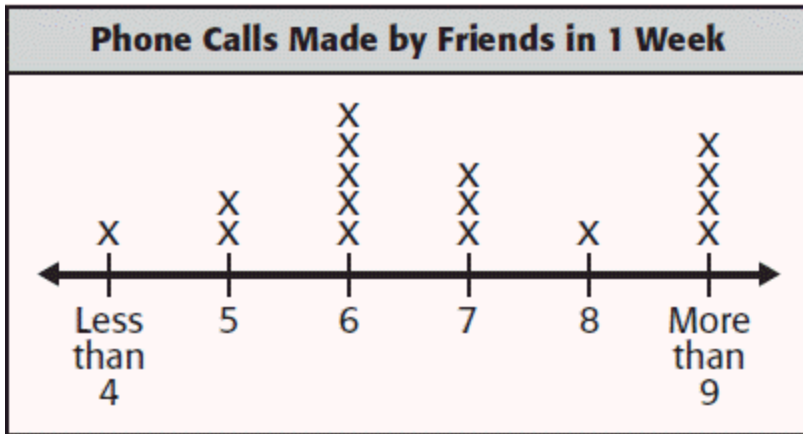
**Solve.**

10. Maryanne spent 15 minutes on her math homework and 25 minutes on her reading homework. She began her homework at 5:00. What time did she finish? 3.MD.1

11. AKDonald is helping his dad build a fence around their backyard. The fence will be rectangle with two sides measuring 45 feet and two sides measuring 20 feet. How much fencing do they need for the perimeter?            AK 3.MD.9

Gr3 Q3 Post Test Benchmark Teacher Copy

Use the line plot below. AK 3.MD.5



12. Which number of phone calls did most friends make?

Answer Key

1. 44 sq. in.; 80 sq. in.
2. C
3. B
4. B
5. A
6.  $1 \frac{2}{4}$  inch
7. B
8. 14 blocks
9. B
10. 5:40
11. 130 feet
12. 6 calls