


GrK Q3 Post Test Benchmark Teacher Copy

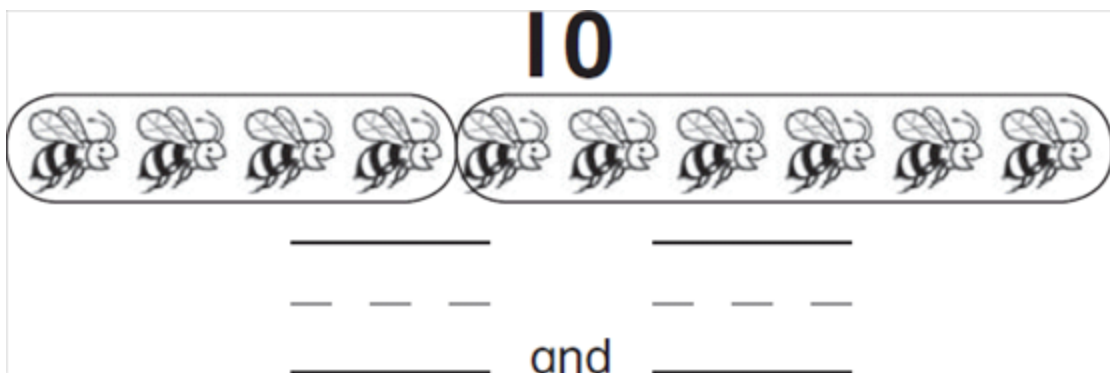
___ 1. Count the objects. Select the number. K.CC.4b



- a. 12
- b. 13
- c. 14
- d. 15

___ 2. Look at the objects.

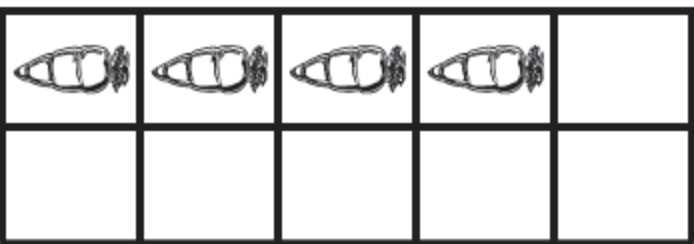
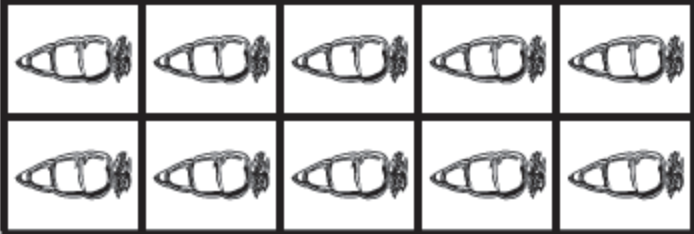
Select the answer that shows a way to take apart ten. K.OA.3



- a. 4 and 6
- b. 2 and 3
- c. 1 and 5

GrK Q3 Post Test Benchmark Teacher Copy

3. Count the objects. Write the number. K.CC.3



— — —

GrK Q3 Post Test Benchmark Teacher Copy

Count by 10s. Select the missing number. K.CC.1

___ 4.

10 20 _____ 40

- a. 25
- b. 30
- c. 35

5. Count by 10s. Write the missing numbers. K.CC.1

40 _____ 60

GrK Q3 Post Test Benchmark Teacher Copy

6. Write the numbers to take apart nine. K.OA.3

9



_____ and _____

Name: _____ Class: _____ Date: _____

GrK Q3 Post Test Benchmark Teacher Copy

Answer Key

1. d

2. a

3. 14

K.CC.3 Write numbers from 0-20. Represent a number of objects with a written numeral 0-20.

4. b

5. 50

6. 1 and 8, 2 and 7, 3 and 6 or 4 and 5